


STUDY LINK
7•1

Fractions



1. Divide the circle into 6 equal parts.
Color $\frac{5}{6}$ of the circle.

Whole
circle



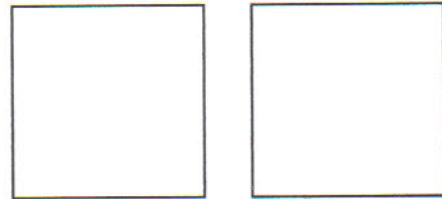
2. Divide the rectangle into 3 equal parts.
Shade $\frac{2}{3}$ of the rectangle.

Whole
rectangle

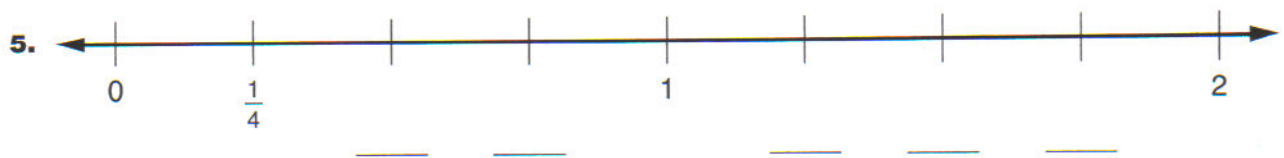
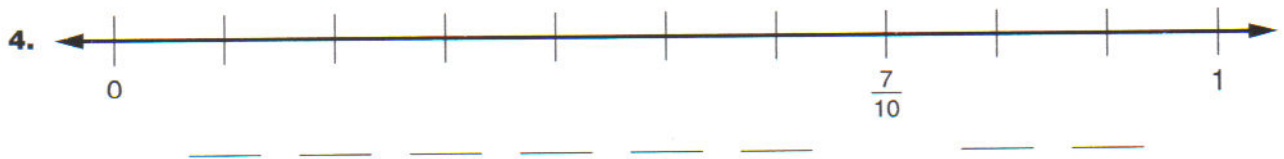


3. Divide each square into fourths.
Color $1\frac{3}{4}$ of the squares.

Whole
square



Fill in the missing fractions and mixed numbers on the number lines.


Practice

6. $854 + 267 = \underline{\hspace{2cm}}$

7. $\underline{\hspace{2cm}} = 3,398 + 2,635$

8. $\underline{\hspace{2cm}} = 6,374 - 755$

9. $5,947 - 3,972 = \underline{\hspace{2cm}}$